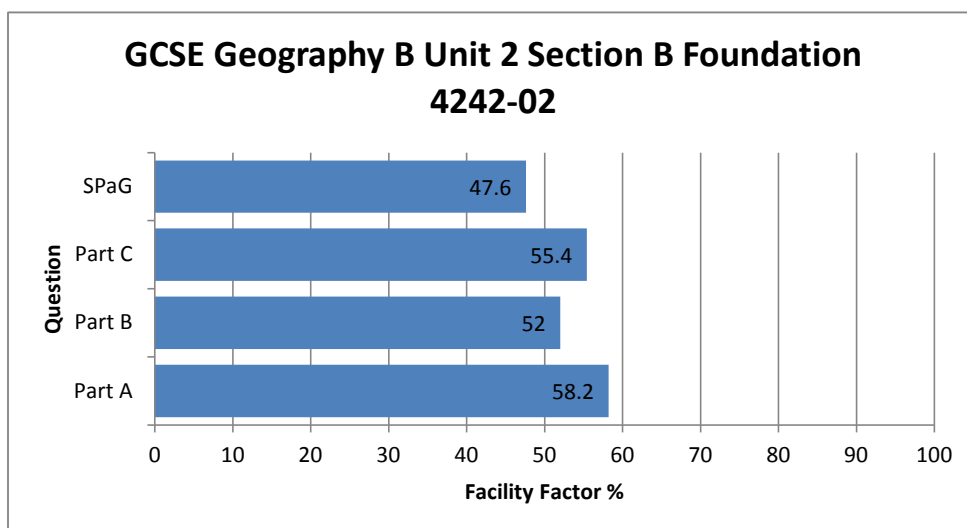


GCSE Geography B Unit 2 Section B Foundation 4242-02

All Candidates' performance across questions

Question Title	N	Mean	S D	Max Mark	FF	Attempt %
Part A	6952	16.9	4.6	29	58.2	100
Part B	6951	10.4	3.2	20	52	100
Part C	6937	6.1	2.4	11	55.4	99.8
SPaG	6938	1.9	0.8	4	47.6	99.8



- (iii) Give **one other** piece of map evidence that may help to explain why the Peak District National Park has a large numbers of visitors. Explain why it may help. [3]

Evidence:

Explanation:

.....

.....

- (iii) Give **one other** piece of map evidence that may help to explain why the Peak District National Park has a large numbers of visitors. Explain why it may help. [3]

Evidence: it is close to large cities

Explanation: people living in Manchester and Sheffield
will more likely visit the National Park
due to how close it is.

- (iii) Give **one other** piece of map evidence that may help to explain why the Peak District National Park has a large numbers of visitors. Explain why it may help. [3]

Evidence: it is close to large cities

Explanation: people living in Manchester and Sheffield
will more likely visit the National Park.
due to how close it is

- (iii) Give **one** other piece of map evidence that may help to explain why the Peak District National Park has a large numbers of visitors. Explain why it may help. [3]

Evidence: It is in the centre of several large cities

Explanation: large cities have a high population
therefore lots of people surround the
peak district and will be more likely to
go there.

- (iii) Give **one** other piece of map evidence that may help to explain why the Peak District National Park has a large numbers of visitors. Explain why it may help. [3]

Evidence: It is in the centre of several large cities

Explanation: large cities have a high population
therefore lots of people surround the
peak district and will be more likely to
go there

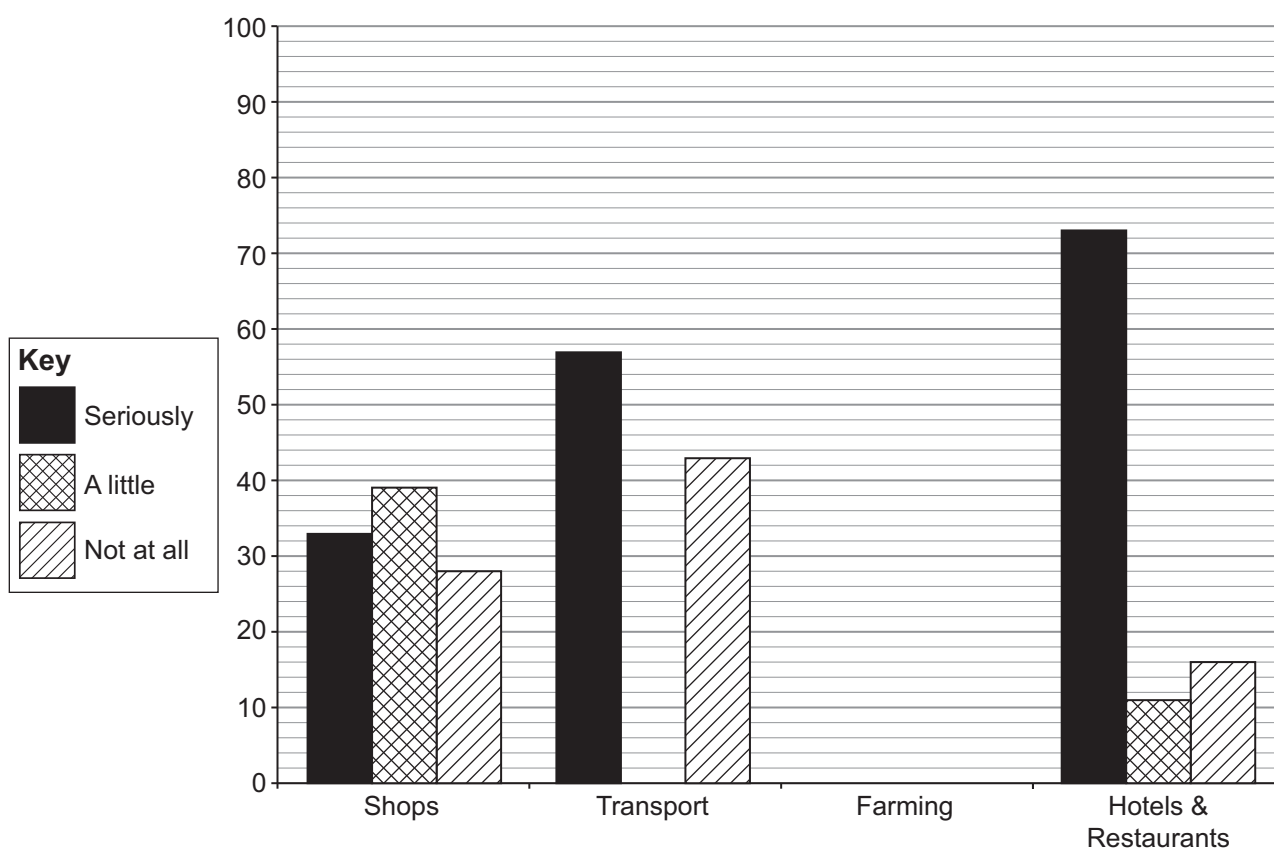
- (b) Quarrying leaves large holes in the ground. Blasting the limestone and carrying it away from the area may cause villages and roadsides to be covered in a layer of grey dust.

Working in a damaged landscape can badly affect other businesses. The graph below shows how much some Peak District industries are affected by quarrying.

- (i) Complete the graph using the following figures:

[2]

Business affected	Seriously	A little	Not at all
Farming	66	18	16



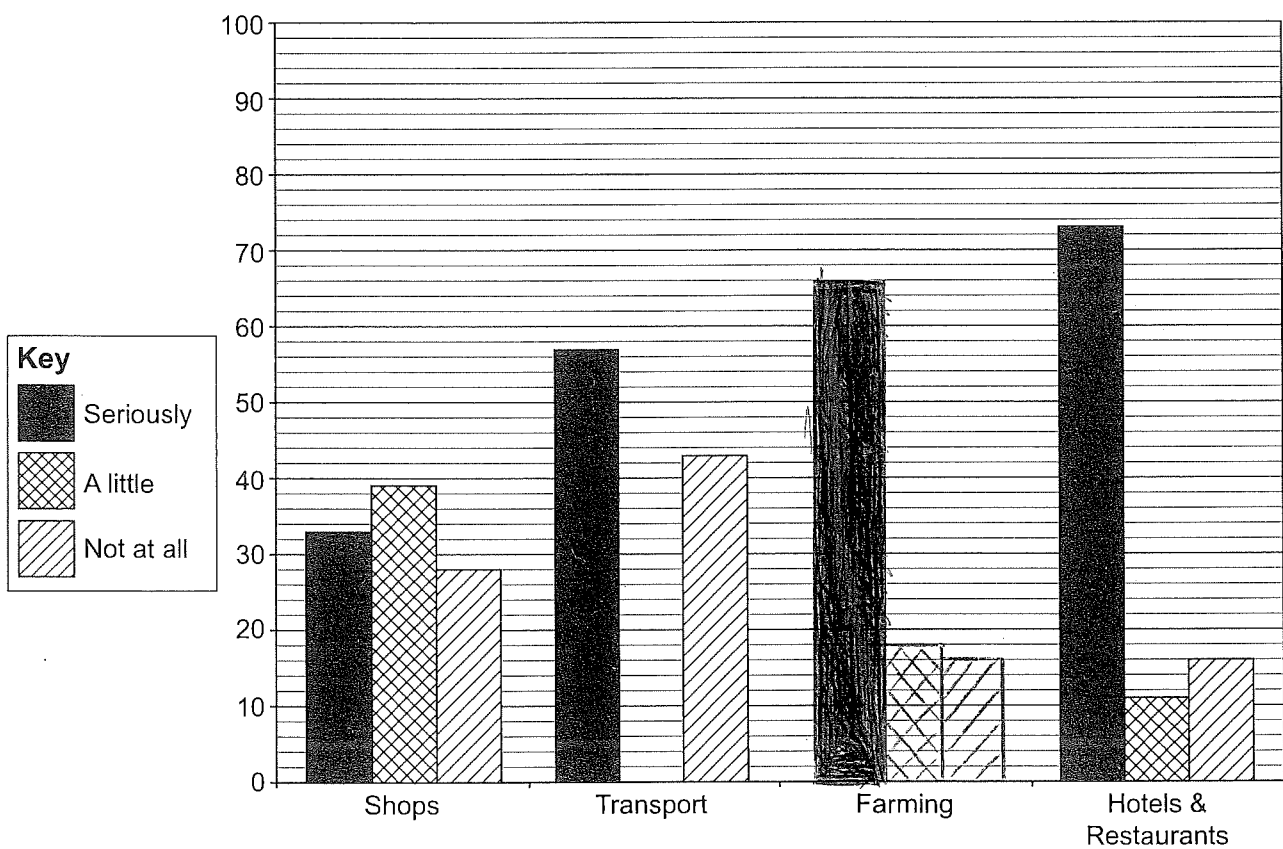
- (b) Quarrying leaves large holes in the ground. Blasting the limestone and carrying it away from the area may cause villages and roadsides to be covered in a layer of grey dust.

Working in a damaged landscape can badly affect other businesses. The graph below shows how much some Peak District industries are affected by quarrying.

- (i) Complete the graph using the following figures:


[2]

Business affected	Seriously	A little	Not at all
Farming	66	18	16



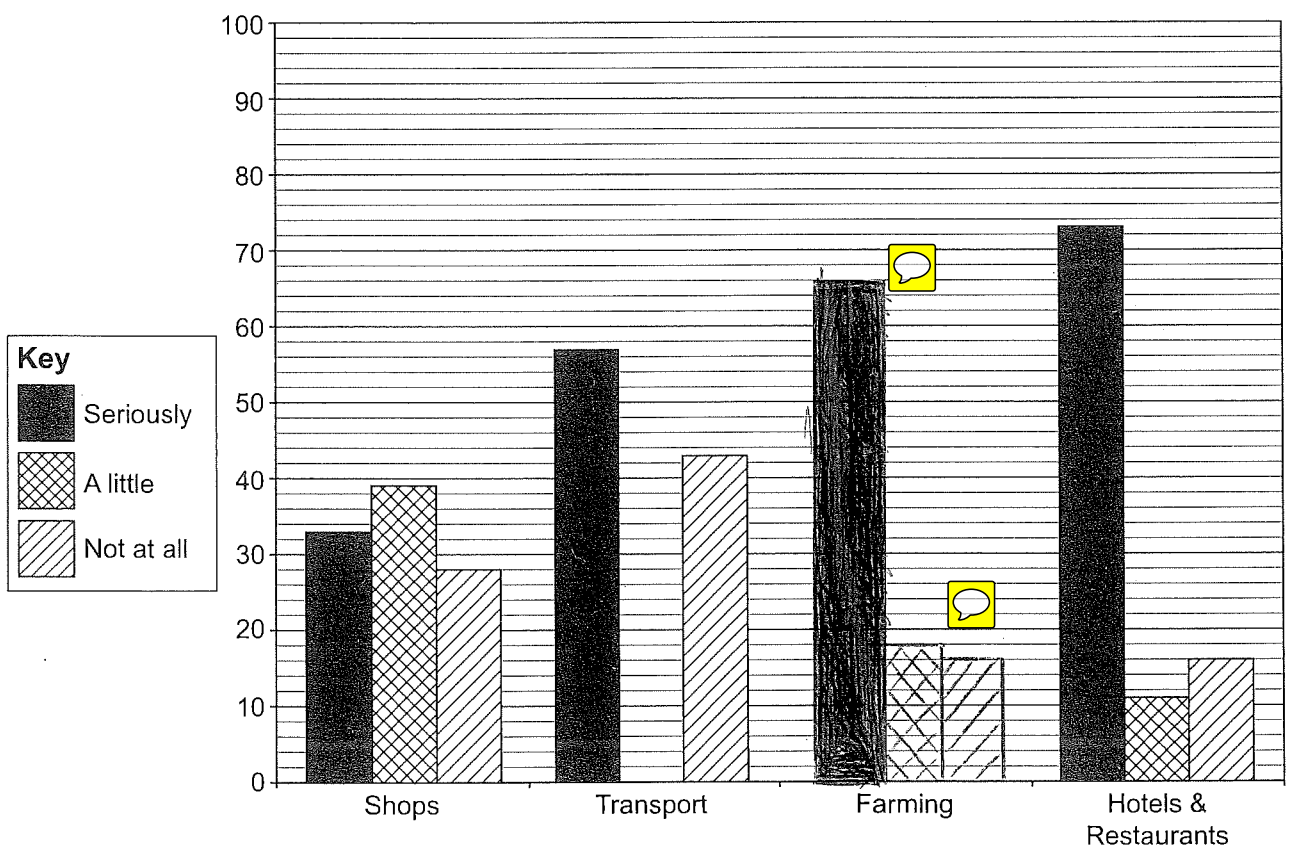
- (b) Quarrying leaves large holes in the ground. Blasting the limestone and carrying it away from the area may cause villages and roadsides to be covered in a layer of grey dust.

Working in a damaged landscape can badly affect other businesses. The graph below shows how much some Peak District industries are affected by quarrying.

- (i) Complete the graph using the following figures: 

[2]

Business affected	Seriously	A little	Not at all
Farming	66	18	16



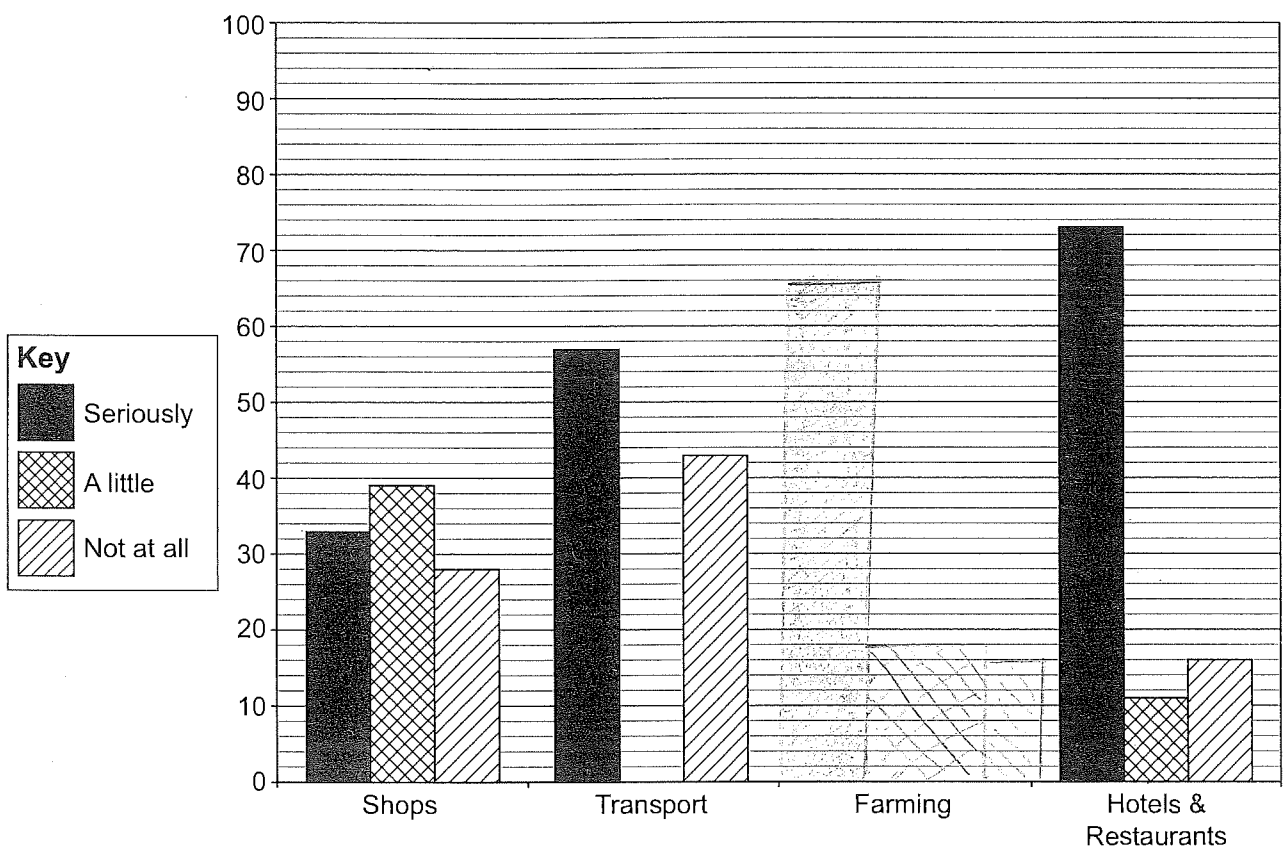
- (b) Quarrying leaves large holes in the ground. Blasting the limestone and carrying it away from the area may cause villages and roadsides to be covered in a layer of grey dust.

Working in a damaged landscape can badly affect other businesses. The graph below shows how much some Peak District industries are affected by quarrying.

- (i) Complete the graph using the following figures:

[2]

Business affected	Seriously	A little	Not at all
Farming	66	18	16



- (b) Quarrying leaves large holes in the ground. Blasting the limestone and carrying it away from the area may cause villages and roadsides to be covered in a layer of grey dust.

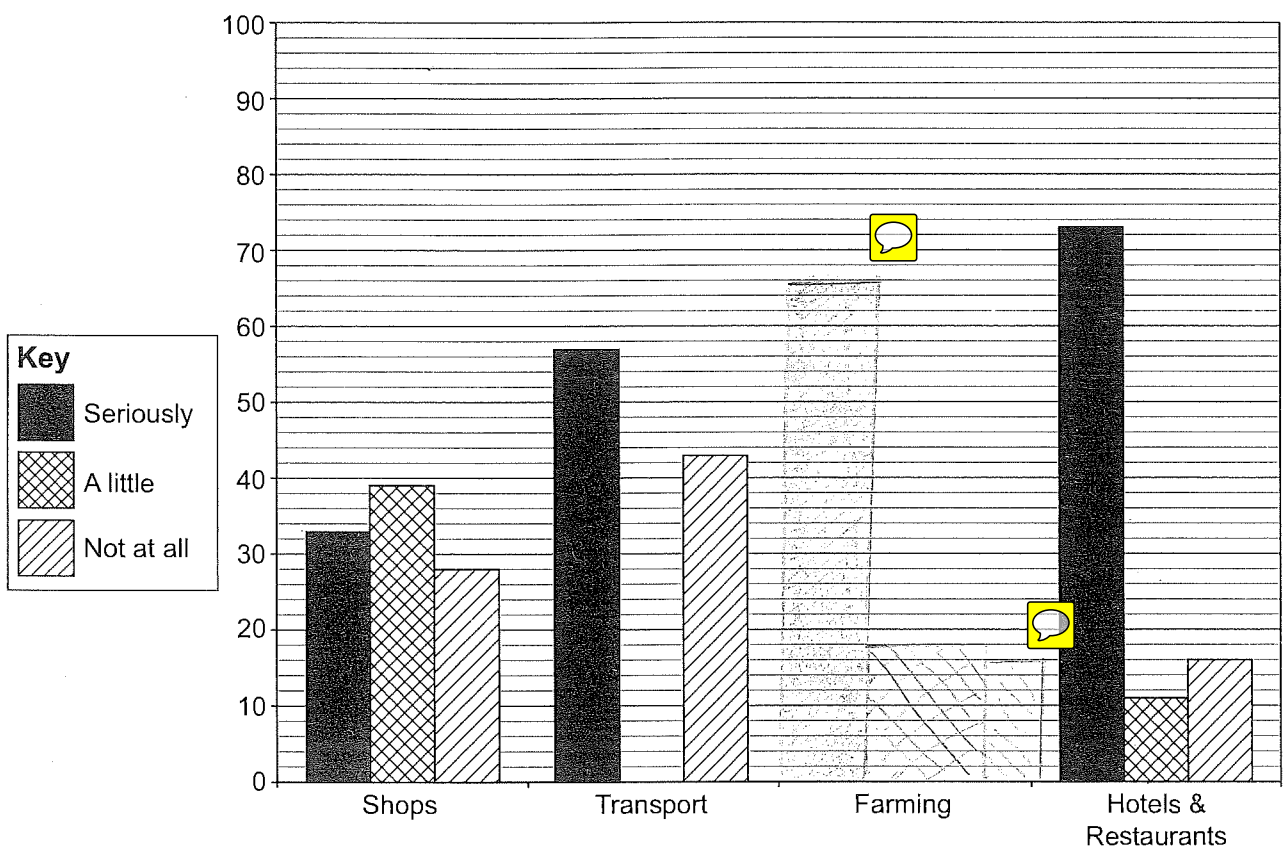
Working in a damaged landscape can badly affect other businesses. The graph below shows how much some Peak District industries are affected by quarrying.

- (i) Complete the graph using the following figures:

[2]



Business affected	Seriously	A little	Not at all
Farming	66	18	16



(c) Study the photographs on **page 7** of the separate **Resource Folder**.

- (ii) Choose **one** of the uses of a disused quarry that is likely to be a **nuisance** to residents of a local village. Circle your choice. [4]

A

B

C

D

Explain why it could be a nuisance:

.....

.....

.....

.....

.....

.....

.....

- (ii) Choose **one** of the uses of a disused quarry that is likely to be a **nuisance** to residents of a local village. Circle your choice. [4]

A

B

C

D

Explain why it could be a nuisance: Because this would create a lot of noise pollution ~~and~~ which will be a nuisance to the people who like quiet. It will cause a mess and will get everywhere muddy which other people will have to clean up.

End of Part B

- (ii) Choose **one** of the uses of a disused quarry that is likely to be a **nuisance** to residents of a local village. Circle your choice. [4]



A

B

C

D

Explain why it could be a nuisance: Because this would create a lot of noise pollution ~~and~~ which will be a nuisance to the people who like quiet. It will cause a mess and will get everywhere muddy which other people will have to clean up.

2

End of Part B

- (ii) Choose **one** of the uses of a disused quarry that is likely to be a **nuisance** to residents of a local village. Circle your choice. [4]

A

B

C

D

Explain why it could be a nuisance: The mess and noise would cause people to become annoyed and frustrated with the people as it could get very loud ~~reflected~~ and could affect local businesses and ~~resto~~ restaurants as people wouldn't want to eat in a loud place.

End of Part B.

- (ii) Choose **one** of the uses of a disused quarry that is likely to be a **nuisance** to residents of a local village. Circle your choice. [4]

A

B

C

D

Explain why it could be a nuisance: The mess and noise would cause people to become annoyed and frustrated with the people as it could get very loud ~~reflected~~ and could affect local businesses and ~~resto~~ restaurants as people wouldn't want to eat in a loud place.

End of Part B.

You should explain why you have chosen this option in terms of its **social**, **economic** and **environmental** effects.

[11+4]

11	4

Tick (✓)	
	allow limestone quarrying to continue
	stop limestone quarrying continuing

Use the information in your matrix on page 10 to write a letter to the Peak District National Park planners. You may also use information from other parts of this paper and ideas of your own.

You should explain why you have chosen this option in terms of its **social**, **economic** and **environmental** effects.

Marks for spelling, punctuation and the accurate use of grammar are allocated to this question.

[11+4]

To the Peak District National Park planners

I am writing to advise you to:

Tick (✓)	
✓	allow limestone quarrying to continue
	stop limestone quarrying continuing

I have chosen this option because

I have chosen this option because I believe that regardless of the sights and roads being ruined, the quarries provide several beneficial aspects to the communities.

Lorries passing through the villages do cause damage to local roads due to their ~~mass~~ huge mass; however to get these lorries to and from the mines requires money which the firms pay. This money can be used to repair as well as improve roads for the lorries benefit, along with the locals benefitting from this improvement.

Moreover, the quarries provide jobs for the locals

all year round; therefore greatly reducing unemployment in the area and increasing the amount of spending money people have to improve their standard of living and quality of life. The money will go into the economy and can be spent to improve hospitals, which in turn will greatly improve the quality of life of people in a vast area.

In addition less money is spent importing limestone which means there will be more money in the economy; as a result taxes can be lowered which means people will have a lot more spending money which improves their standard of living as they can spend the extra money on nice things.

Finally once the quarry has had its final use and the profits from it have been maximised it can be transformed for recreational use for the locals which allows locals to spend their leisure time outside as the disused quarry can be turned into a lake or plants can be regrown.

End of Part C

END OF PAPER



Use the information in your matrix on page 10 to write a letter to the Peak District National Park planners. You may also use information from other parts of this paper and ideas of your own.

You should explain why you have chosen this option in terms of its **social, economic and environmental** effects.

Marks for spelling, punctuation and the accurate use of grammar are allocated to this question.

[11+4]



To the Peak District National Park planners

I am writing to advise you to:

Tick (✓)	
✓	allow limestone quarrying to continue
	stop limestone quarrying continuing

I have chosen this option because

I have chosen this option because I believe that regardless of the sights and roads being ruined, the quarries provide several beneficial aspects to the communities.


Lorries passing through the villages do cause damage to local roads due to their ~~mass~~ huge mass; however to get these lorries to and from the mines requires money which the firms pay. This money can be used to repair as well as improve roads for the lorries benefit, along with the locals benefitting from this improvement.


Moreover, the quarries provide jobs for the locals


Examiner
only



10	3
11	4

all year round; therefore greatly reducing unemployment in the area and increasing the amount of spending money people have to improve their standard of living and quality of life. The money will go into the economy and can be spent to improve hospitals, which in turn will greatly improve the quality of life of people in a vast area. 

In addition less money is spent importing limestone which means there will be more money in the economy; as a result taxes can be lowered which means people will have a lot more spending money which improves their standard of living as they can spend the extra money on nice things. 

Finally once the quarry has had its final use and the profits from it have been maximised it can be transformed for recreational use for the locals which allows locals to spend their leisure time outside as the disused quarry can be turned into a lake or plants can be regrown. 

End of Part C

END OF PAPER

Use the information in your matrix on page 10 to write a letter to the Peak District National Park planners. You may also use information from other parts of this paper and ideas of your own.

You should explain why you have chosen this option in terms of its **social**, **economic** and **environmental** effects.

Marks for spelling, punctuation and the accurate use of grammar are allocated to this question.

[11+4]

To the Peak District National Park planners

I am writing to advise you to:

Tick (✓)	
	allow limestone quarrying to continue
✓	stop limestone quarrying continuing

I have chosen this option because

There are too many ~~effects~~ negative effects ~~signify~~ on the community because of the limestone quarrying.

Its not just the quarrying site.

Its also the vehicles being used.

Lorries passing through the local villages creates danger for locals and disturbs the peace of the villages.

Your lorries not only put locals in danger but also damage ~~the~~ the roads, making it unsafe for others to drive on.

The quarry's can be seen from a long distance. This ruins ~~the~~ the village views.

and the villages tourist attraction, this prevents tourists from visiting the area which results in shops not getting the customers or money they need.

Another reason I chose this option is because the quarries are ruining and killing the wildlife. Most people would not care about the wildlife, but ruining the wildlife would mean few of the villagers could not go fishing etc. anymore.

My final reason is that quarries cause pollution. Pollution makes the town look and smell disgusting. This will not only drive off tourists, but the locals also.

End of Part C

END OF PAPER

Use the information in your matrix on page 10 to write a letter to the Peak District National Park planners. You may also use information from other parts of this paper and ideas of your own.

You should explain why you have chosen this option in terms of its **social**, **economic** and **environmental** effects.

Marks for spelling, punctuation and the accurate use of grammar are allocated to this question.


[11+4]


To the Peak District National Park planners


I am writing to advise you to:

Tick (✓)	
	allow limestone quarrying to continue
✓	stop limestone quarrying continuing


I have chosen this option because


There are too many ~~effects~~ negative effects ~~signify~~ on the community because of the limestone quarrying. 


It's not just the quarrying site. It's also the vehicles being used. Lorries passing through the local villages creates danger for locals and disturbs the peace of the villages. 

Your lorries not only put locals in danger but also damage ~~the~~ the roads, making it unsafe for others to drive on. 

The quarry's can be seen from a long distance. This ruins ~~the~~ the village views.

and the villages tourist attraction, this prevents tourists from visiting the area which results in shops not getting the customers or money they need. 

Another reason I chose this option is because the quarries are ruining and killing the wildlife. Most people would not care about the wildlife, but ruining the wildlife would mean few of ~~so~~ the villagers could not go fishing etc. anymore. 

My final reason is that quarries cause pollution. Pollution makes the town look and smell disgusting. This will not only drive off tourists, but the locals also. 



End of Part C

END OF PAPER